

VIDYA BHAWAN BALIKA VIDYA PITH

CLASS- 2

DATE – 15.09.21

SUB- MATHS




C. T – PRAGYA

BASED ON N.C.E.R.T PATTERN

CH - ADDITION

Read about types of line and fill in book .

- 1.Count the number of horizontal , vertical ,
And Slanting lines in the given figures .

| | | |
|---|--|---|
|  |  |  |
| Horizontal line <input type="text"/> | Horizontal line <input type="text"/> | Horizontal line <input type="text"/> |
| Vertical line <input type="text"/> | Vertical line <input type="text"/> | Vertical line <input type="text"/> |
| Slanting line <input type="text"/> | Slanting line <input type="text"/> | Slanting line <input type="text"/> |

- 2.Draw the figures by moving your pencil first

On the dotted lines and then using free hand.

